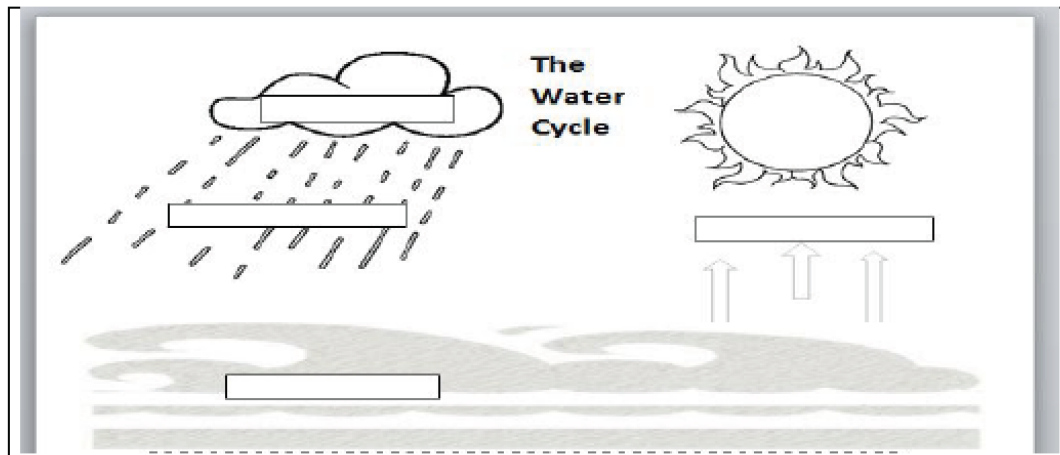


Level 2







1. Label and write what you learned about the different forms of water and how they travel in each water cycle stage or complete your KWL chart.

Water can travel as a liquid, solid, or gas during the water cycle process.





In the _____ phase, the water changes from a liquid to a _____.

precipitation evaporation solid gas

 OR   OR 





In the _____ phase, the water changes from a gas to a _____.

precipitation evaporation solid liquid

 OR   OR 




In the _____ phase, the water falls to the earth as a _____.

condensation collection liquid gas

 OR   OR 

In the _____ phase, the water comes together into a body of water and sits as a _____.

condensation collection solid liquid

 OR   OR 